

Name : _____

Score : _____

Teacher : _____

Date : _____

Measuring in Inches

How many Inches ?

















Name _____


Measuring Objects

Use your ruler to measure the following objects and write the length on the line.

1.




2.




3.




4.




5.



6.



7.



8.

